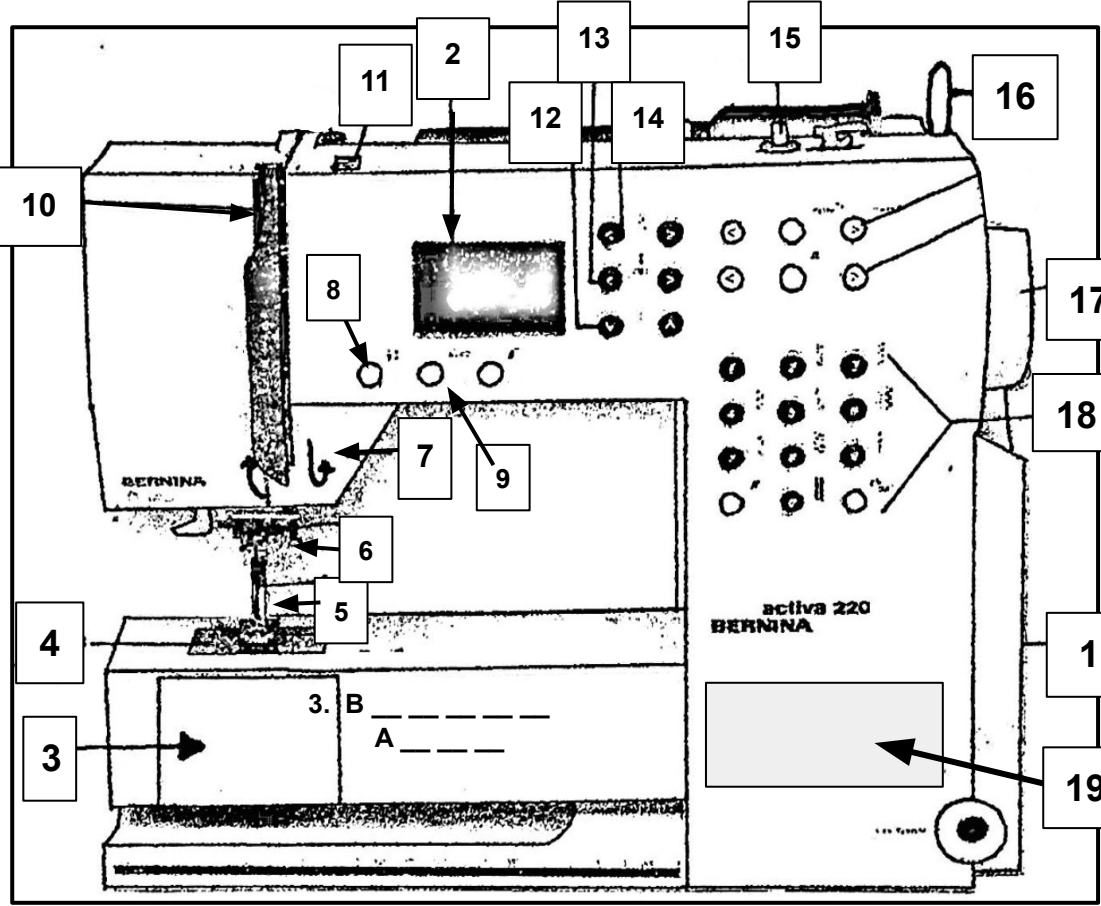


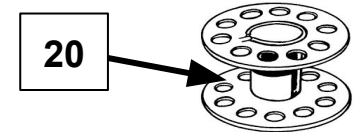
IDENTIFY THE SEWING MACHINE PARTS:

Write the name of the Machine part and a brief description about how it is used.

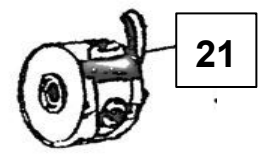
- 13. N _____
P _____
- 12. S _____
L _____
C _____
- 11. T _____
T _____
- 10. T _____ U _____
L _____
- 9. H _____ S _____
C _____
- 8. N _____ - _____
U _____ - D _____
C _____
- 7. R _____
S _____
- 6. N _____
C _____
- 5. N _____
- 4. S _____
P _____



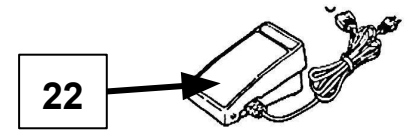
- 14. S _____
W _____
C _____
- 15. B _____
W _____
- 16. S _____
P _____
- 17. H _____
W _____
- 18. P _____ --- S _____
S _____
- 1. P _____
S _____
- 19. E _____
S _____



20. B _____



21. B _____
C _____



22. F _____
P _____